

Starting to Add

As these flowers get taller, they grow 1 more leaf. Trace the bee's route as it visits the flowers from 1 to 10.




1 more than 2 is

1 more than 1 is

1 more than 4 is



1 more than 6 is

1 more than 8 is



Buzz
Buzz

Trace the new leaves.



Which flower is the shortest and has the fewest leaves? Write the number in the box.

Which flower is the tallest and has the most leaves? Write the number in the box.